




# Counting Practice - Odds and Evens


- Count the number of each image.
- Write the number.
- Circle if it is odd or even.



3


Odd

Even




Odd

Even




Odd

Even



Odd

Even



Odd

Even